

Notes and Rests

How many beats do each of these get?
Choose the correct answer in the dropdown menu.



Click on one box in each row which adds up to the same number of beats as the number in the coloured box






















6			
8			
10			
5			
8			
7			
10			

Figure out the answer and type the number in the box. Be careful as there is both addition and subtraction.

$$1) \text{O} - \text{♪} + \text{♩} + \text{O} = \square$$

$$2) \text{♩} + \text{♯} + \text{♪} - \text{♩} = \square$$

$$3) \text{♩} + \text{O} - \text{♩} + \text{♪} = \square$$

$$4) \text{♪} + \text{♪} + \text{O} - \text{♯} = \square$$

$$5) \text{♩♩♩♩} + \text{♪} - \{ + \text{O} = \square$$

$$6) \text{O} + \text{♩} + \text{♩} - \text{♯} + \text{O} = \square$$