


## ME3-25 Mass

Mass is the amount of matter in an object.  
The heavier the object, the greater the mass.

1. Circle the object that has more mass.

a)



b)



c)



2. Circle the object that has less mass.

a)



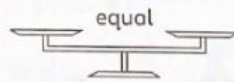
b)



c)



A **balance** is used to find if two objects have the same mass.



3. Circle the heavier object.

a)



b)



c)



d)



e)



f)



4. Circle the lighter object.

a)



b)



c)




5. Circle the heavier object. Hint: Use what the balance tells you.

a)



b)



c)



d)



6. Circle the heavier object. Hint: Use what the balances tell you.

a)



b)



**BONUS** ► Circle the heaviest object.

