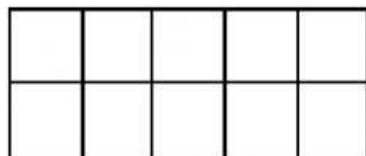


AREA AND PERIMETER OF RECTANGLES 1

Work out the area and perimeter of the following rectangles.

Each square on the sheet is 1 square cm. Remember **area** is the **number of squares inside**, and **perimeter** is the **distance round the outside** of the shape.


1)



Area = _____ square cm

Perimeter = _____ cm

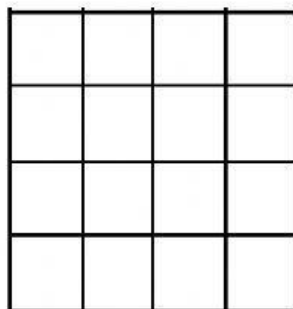
2)



Area = _____ square cm

Perimeter = _____ cm

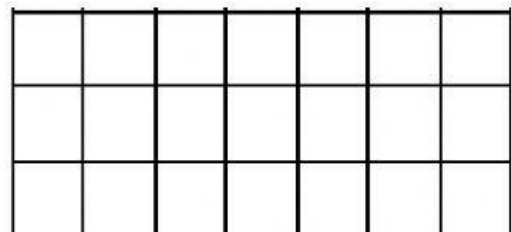
3)



Area = _____ square cm

Perimeter = _____ cm

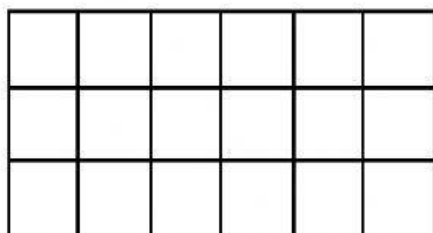
4)



Area = _____ square cm

Perimeter = _____ cm

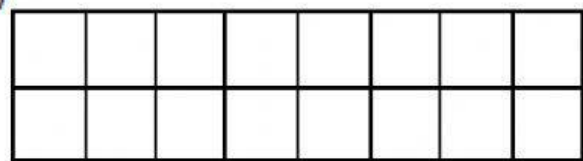
5)



Area = _____ square cm

Perimeter = _____ cm

6)



Area = _____ square cm

Perimeter = _____ cm