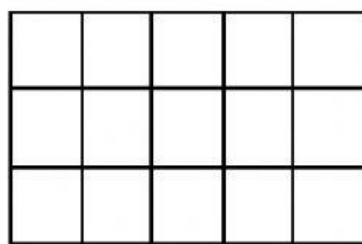


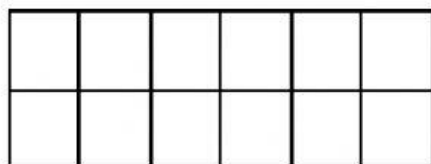
AREA OF RECTANGLES SHEET 1

To find the area of a rectangle, simply count the number of cm squares inside the rectangle. The area of the shape below is $5 \times 3 = 15$ square cm.



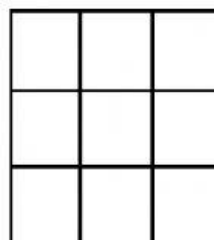
Work out the area of the following rectangles:

1)



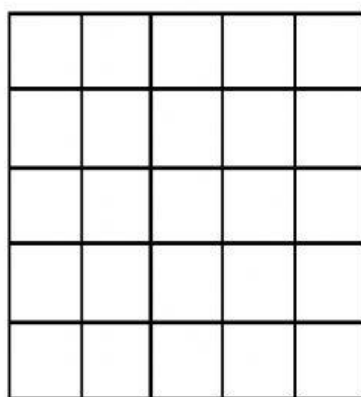
Area = _____ square cm

2)




Area = _____ square cm

3)



Area = _____ square cm

4)

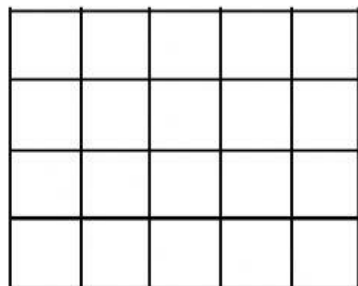


Area = _____ square cm

AREA OF RECTANGLES SHEET 2

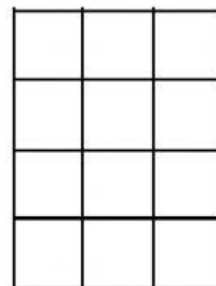
Work out the area of the following rectangles:

1)



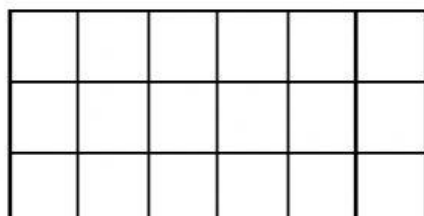
Area = _____ square cm

2)




Area = _____ square cm

3)



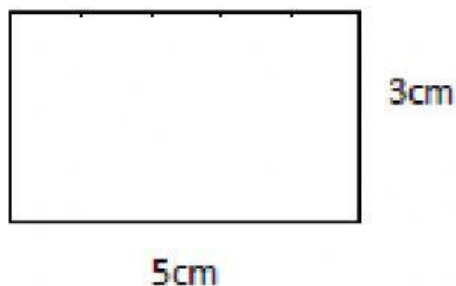
Area = _____ square cm

4)



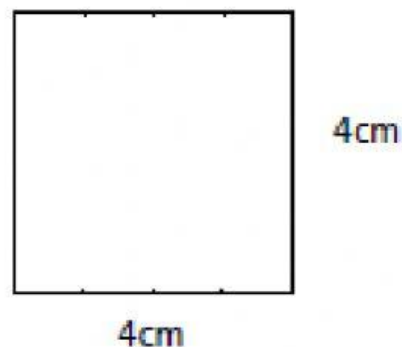
Area = _____ square cm

5)



Area = _____ square cm

6)



Area = _____ square cm