

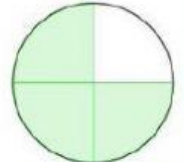
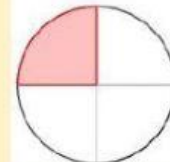



Repaso de fracciones

Sra. Pérez



FRACCIONES

Colocar el número que representa la fracción de la figura.



$$\frac{1}{2}$$

$$\frac{1}{4}$$

$$\frac{2}{3}$$



$$\frac{2}{4}$$

$$\frac{2}{6}$$

$$\frac{3}{4}$$


$$\frac{4}{6}$$

Identifica como se lee las fracciones

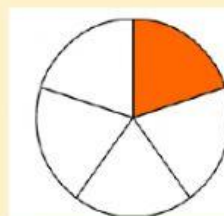
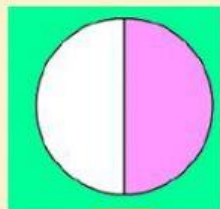



Selecciona las figuras u operación matemática que representa una fracción unitaria.

$3/4$

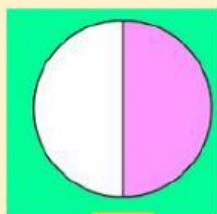


$1/7$

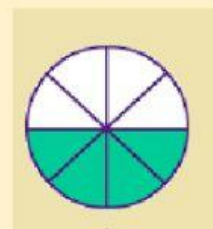


Fracciones equivalentes

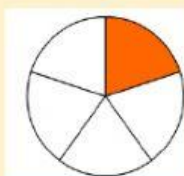
$1/2$



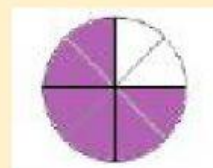
$4/8$




$1/5$



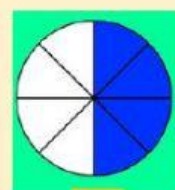
$6/8$



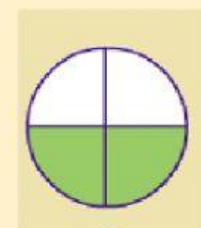
$3/4$



$4/8$



$2/4$



$2/10$

