

INDIRAPURAM PUBLIC SCHOOL
CROSSINGS REPUBLIK
CLASS -III (EVS)
Chapter 1 (Part1)
Parts Of Our Body

NAME-_____ **SEC-**_____

Q.1 Tick (✓) the correct option.

a) Which of the following is an internal body part?

- i) head ii) Tongue iii) brain iv) none of these

b) Which of the following is a sense organ?

- i) brain ii) heart iii) lungs iv) eyes

c) Which of the following is an external organ?

- i) stomach ii) ears iii) eyebrows iv) both (ii) and (iii)

Q.2 Drag and drop the body parts in the given picture.

Eyebrow

Mouth

Toe

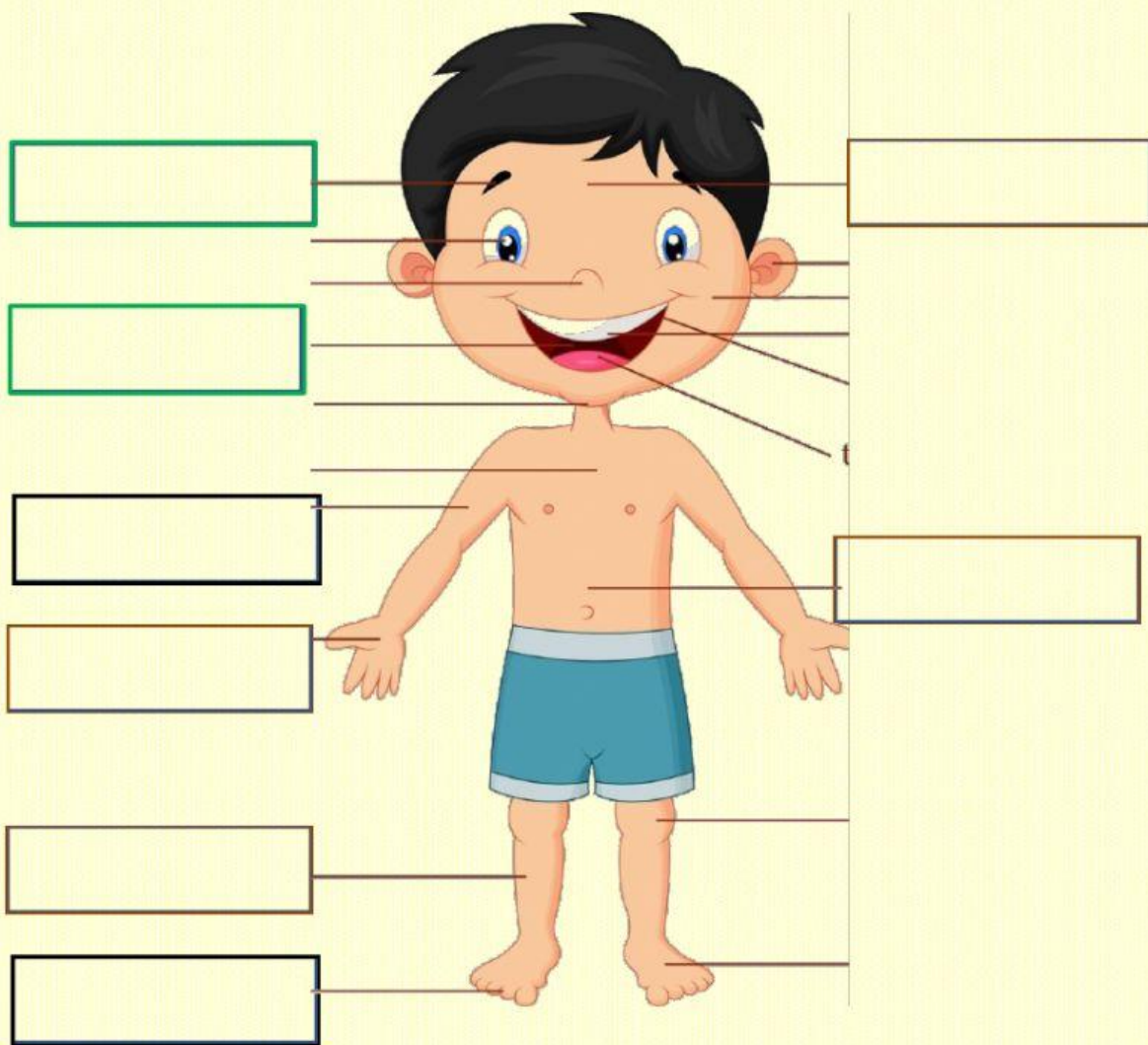
Leg

Hand

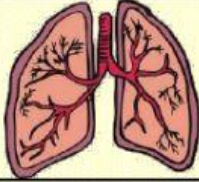
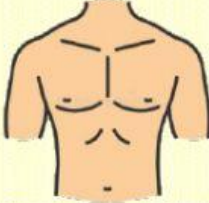

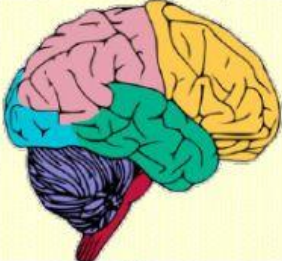
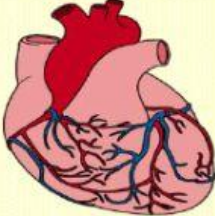



Forehead

Arm

Stomach



Q.3 Use arrows and join the correct body part.

Brain	
Finger	
Shoulder	
Stomach	
Lungs	
Head	
Heart	
Chest	


Q.4 Fill in the gaps with the sense organ used for the following.

- a) Smelling a perfume- _____
- b) Feeling the texture of grass- _____
- c) Tasting a cake- _____
- d) Listening to a song- _____
- e) Looking at a beautiful flower _____

Q.5 Select the correct option from the drop down box.

- a) We use our _____ to lift objects.
- b) We use our _____ to kick a ball.
- c) Chest is an _____ body part.
- d) Stomach is an _____ body part.
- e) We have _____ sense organs.
- f) We can recognise red colour by the help of our _____.
- g) We use our _____ to hold a note book.
- h) _____ is the largest sense organ.

Q.6 Watch the video and answer the following questions:



- i. What are the functions of the brain in our body?



- ii. Where is the heart located in our body

