

ESCOLA CLASSE 08 DE BRAZLÂNDIA

PROFESSORA: _____

ALUNO(A): _____

DATA: _____ / _____ / _____

ATIVIDADE



- 1) MARIA SERVIU NO ALMOÇO DO SEU COELHINHO. ELE COMEU 2 CENOURAS.


SOBROU ALGUMA CENOURA?

SIM


NÃO

--	--


QUANTAS ? _____

DESENHO	OPERAÇÃO	RESPOSTA
	_____ - _____ = _____	SOBROU _____ CENOURA.

- 2) NO ZOOLOGICO HAVIA  ,MAS 2 DELES FORAM PARA O CIRCO. QUANTOS ELEFANTES RESTARAM NO ZOOLOGICO?

DESENHO	OPERAÇÃO	RESPOSTA
	$\text{---} - \text{---} = \text{---}$	AINDA RESTARAM ___ ELEFANTES.

- 3) EM UM AQUÁRIO HAVIA  . PEDRO DEU 3 PEIXINHOS À SUA PRIMA.COM QUANTOS PEIXINHOS PEDRO FICOU?

DESENHO	OPERAÇÃO	RESPOSTA
	$\text{---} - \text{---} = \text{---}$	PEDRO FICOU COM___ PEIXES.

4) COPIE E RESPONDA EM SEU CADERNO, A SUBTRAÇÃO DOS CONJUNTOS.SIGA O MODELO

$$\begin{array}{|c|} \hline \begin{array}{|c|c|} \hline \square \square \\ \hline \square \square \\ \hline \end{array} \\ \hline \end{array} - \begin{array}{|c|} \hline \begin{array}{|c|} \hline \square \\ \hline \end{array} \begin{array}{|c|} \hline \square \\ \hline \end{array} \\ \hline \end{array} = \begin{array}{|c|} \hline \begin{array}{|c|} \hline \square \\ \hline \end{array} \begin{array}{|c|} \hline \square \\ \hline \end{array} \\ \hline \end{array}$$

$$\begin{array}{|c|} \hline 4 \\ \hline \end{array} - \begin{array}{|c|} \hline 2 \\ \hline \end{array} = \begin{array}{|c|} \hline 2 \\ \hline \end{array}$$

$$\begin{array}{|c|} \hline \begin{array}{|c|c|c|} \hline \bigcirc \quad \bigcirc \quad \bigcirc \\ \hline \bigcirc \quad \bigcirc \quad \bigcirc \end{array} \\ \hline \end{array} - \begin{array}{|c|} \hline \begin{array}{|c|c|} \hline \bigcirc \quad \bigcirc \\ \hline \end{array} \\ \hline \end{array} = \begin{array}{|c|} \hline \square \\ \hline \end{array}$$

$$\begin{array}{|c|} \hline \quad \quad \quad \\ \hline \end{array} - \begin{array}{|c|} \hline \quad \quad \quad \\ \hline \end{array} = \begin{array}{|c|} \hline \quad \quad \quad \\ \hline \end{array}$$

$$\begin{array}{|c|} \hline \begin{array}{|c|c|c|} \hline \triangle \triangle \triangle \\ \hline \triangle \triangle \triangle \end{array} \\ \hline \end{array} - \begin{array}{|c|} \hline \begin{array}{|c|c|} \hline \triangle \triangle \\ \hline \end{array} \\ \hline \end{array} = \begin{array}{|c|} \hline \square \\ \hline \end{array}$$

$$\begin{array}{|c|} \hline \quad \quad \quad \\ \hline \end{array} - \begin{array}{|c|} \hline \quad \quad \quad \\ \hline \end{array} = \begin{array}{|c|} \hline \quad \quad \quad \\ \hline \end{array}$$

$$\begin{array}{|c|} \hline \begin{array}{|c|c|c|} \hline \square \square \square \\ \hline \square \square \square \end{array} \\ \hline \end{array} - \begin{array}{|c|} \hline \begin{array}{|c|} \hline \square \\ \hline \end{array} \\ \hline \end{array} = \begin{array}{|c|} \hline \square \\ \hline \end{array}$$

$$\begin{array}{|c|} \hline \quad \quad \quad \\ \hline \end{array} - \begin{array}{|c|} \hline \quad \quad \quad \\ \hline \end{array} = \begin{array}{|c|} \hline \quad \quad \quad \\ \hline \end{array}$$