

POPULATION

Click on the correct answer.

1. If there are more deaths than births, population

2. The average number of children per woman in a country is called

3. The number of people living in each square kilometre of an area is called



Read and match.

municipal register

national census

birth rate

death rate

natural change

fertility rate

the average number of children per woman

the number of people who die for every 1 000 people

the number of babies that are born for every 1 000 people

the difference between the number of births and the number of deaths

taken every ten years by the INE to count the inhabitants of Spain

an official register of inhabitants kept by the local government

Drag the words.

gender

rural population

age

population

ethnic group

urban population

place of residence

1. We can divide the of a country according to various factors.
2. We can divide population according to . For example, children (between the ages 0 and 14), adults (from 15 to 64) and older people (65 years old or more).
3. We can divide population by (males and females).
4. We can divide population by . The lives in cities, and the lives in villages or the countryside.
5. People that have a common language and culture form an .

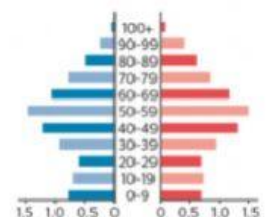
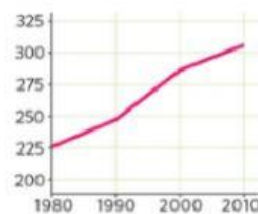
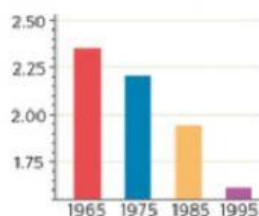
Look and drag the words.

line graph

pie chart

pyramid graph

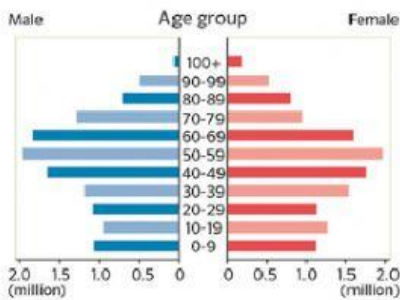
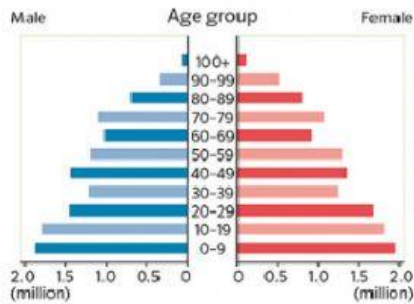
bar chart



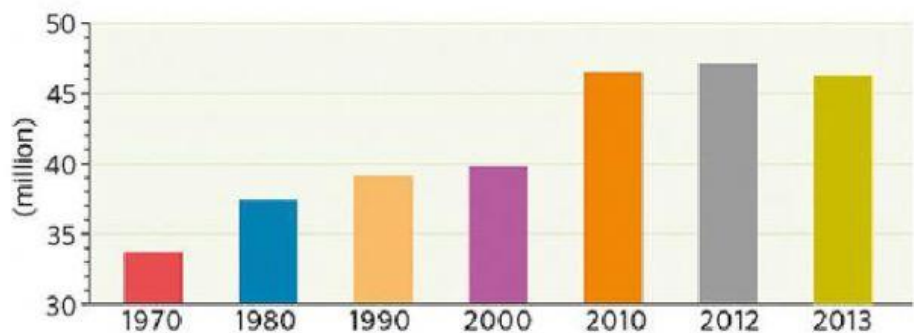
Read and drag the sentences.

The population grew rapidly in the past but is now decreasing.

The population is increasing because there are more young people than older people.



Are these sentences true or false?



1. The population in Spain has increased since 2000.

☐ True ☐ False

2. From 2012 to 2013, there was a small decrease in population.

☐ True ☐ False

3. The biggest increase was between 1990 and 2000.

☐ True ☐ False

4. In 2012, the population was 40 million people.

☐ True ☐ False

5. Since 2010, the population has been above 45 million people.

☐ True ☐ False