





Name: _____

Directions

Step 1: Circle the Key Word

Step 2. Solve the problem and show your work. **NO**
CALCULATORS. Label your answer!

1. Djay bought 642 Pokémon. Braylon Bought 432 Pokémon cards. How many Pokémon cards do they have in total?

OPERATION WORDS			
add addition sum total plus more than combine in addition to increased by enlarged by exceeds by	greater than together gain	subtract subtraction minus take away decreased by less than diminished by reduced by fewer than How many more than? How many fewer than? How many left?	difference dropped loss of
			
multiply multiplied by times of by product factors at groups of each every		divided by into quotient per ratio parts dividend divisor distributed among How much for each? How many groups?	fractions each every
			
COMPARISON SYMBOLS			
= equals	≤ is less than or equal to		
< is less than	≥ is greater than or equal to		
> is greater than			

2. Mona has 579 minutes on LiteracyPro. Kari has 865 minutes. How many more minutes does Kari have than Mona?

3. Kaeleb used 8 tomatoes to make salsa. He used 4 times as many tomatoes to make sauce. How many tomatoes did Kaeleb use to make sauce?

4. Ms. Whalley has 5 times as many tulips as rose bushes in her garden. There are 15 tulips. How many rose bushes are in the garden?
