
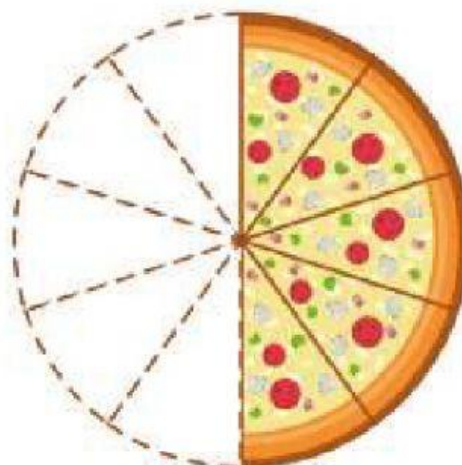
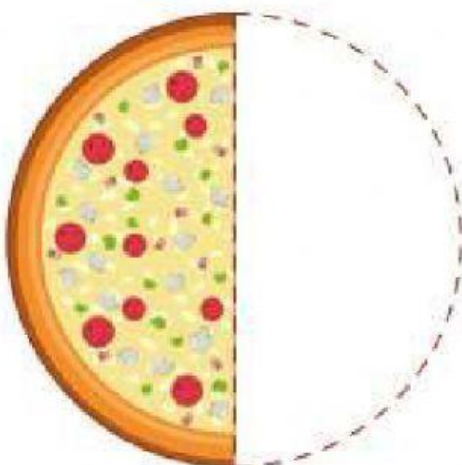
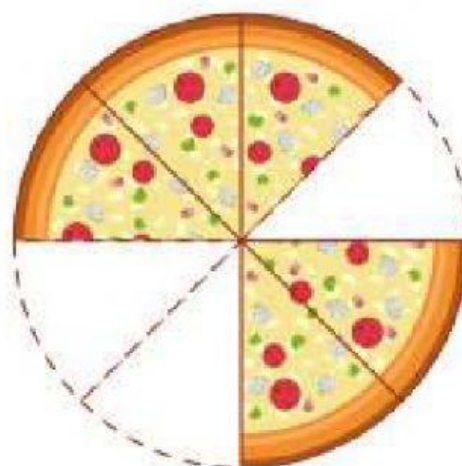
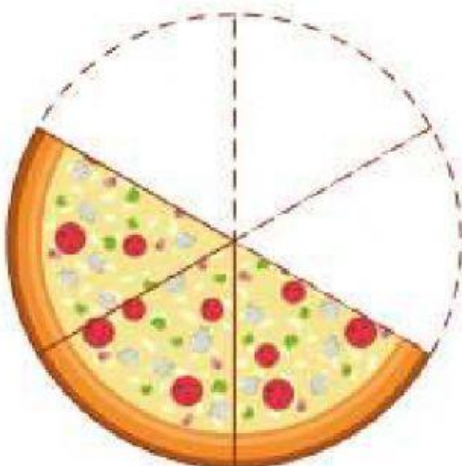
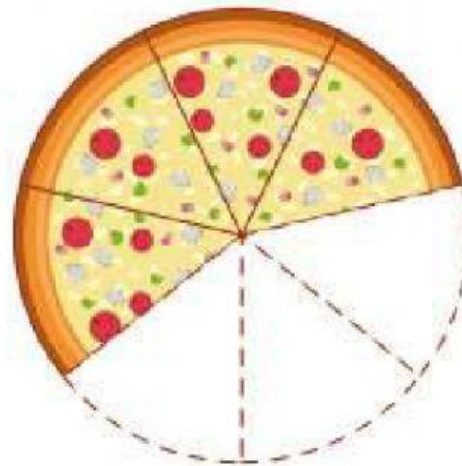

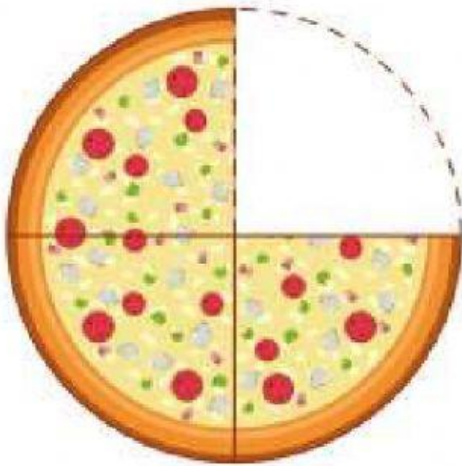


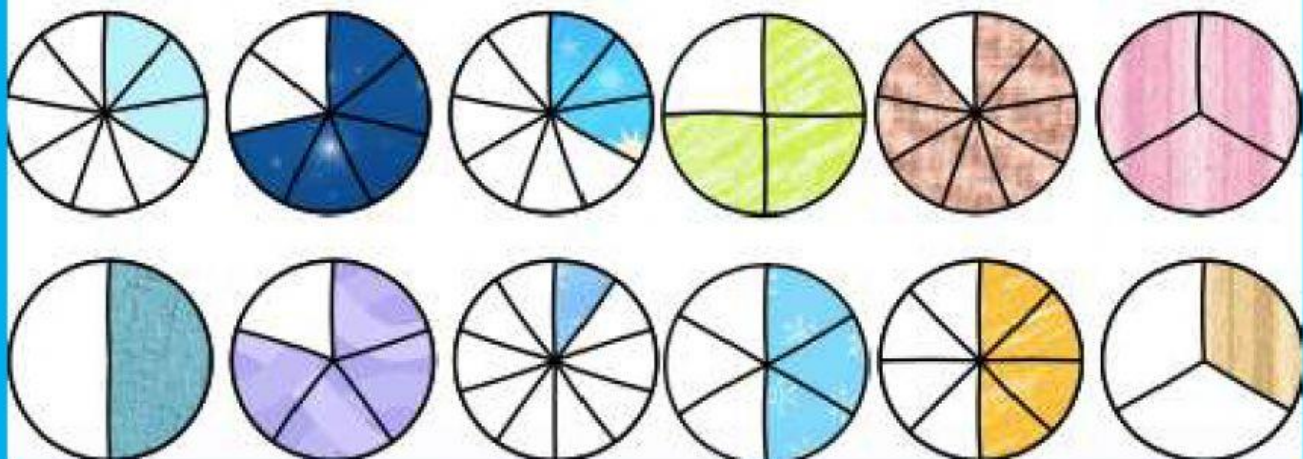


## FRAÇÃO

ESCREVA UMA FRAÇÃO QUE REPRESENTA AS PARTES QUE SOBRARAM  
DAS PIZZAS.



ARRASTE CADA FIGURA EM SUA FRAÇÃO CORRESPONDENTE.

LEMBRE-SE:  $\frac{\text{NUMERADOR}}{\text{DENOMINADOR}}$  → NÚMERO DE PARTES QUE FORAM RETIRADAS DO INTEIRO  
 → NÚMERO DE PARTES QUE O INTEIRO FOI DIVIDIDO



ESCREVA COMO SE LÊEM AS FRAÇÕES ABAIXO

$$\frac{5}{9}$$

$$\frac{2}{8}$$

$$\frac{8}{12}$$

$$\frac{3}{5}$$

$$\frac{4}{10}$$

$$\frac{3}{6}$$

$$\frac{15}{2}$$

$$\frac{3}{7}$$

$$\frac{1}{4}$$

$$\frac{2}{10}$$

$$\frac{1}{9}$$

$$\frac{3}{3}$$

twinkl.com

twinkl.com