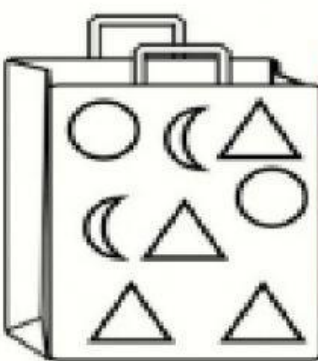


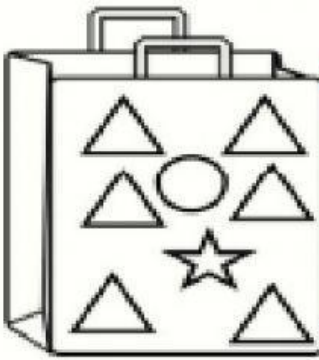




# Shape Probability

Look at each bag and answer the questions below.

How likely are you to pick a  $\triangle$  out of the bag?

	<div>Likely</div> <div>Unlikely</div> <div>Impossible</div>		<div>Likely</div> <div>Unlikely</div> <div>Impossible</div>
	<div>Likely</div> <div>Unlikely</div> <div>Impossible</div>		<div>Likely</div> <div>Unlikely</div> <div>Impossible</div>
	<div>Likely</div> <div>Unlikely</div> <div>Impossible</div>		<div>Likely</div> <div>Unlikely</div> <div>Impossible</div>