




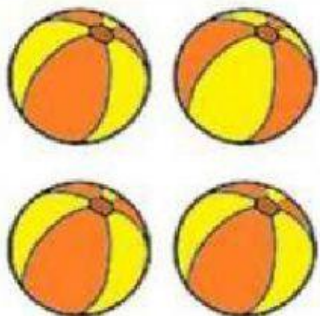


MARCÁ LA CANTIDAD QUE CORRESPONDE

	<p>1</p> <p>2</p> <p>3</p>		<p>1</p> <p>2</p> <p>3</p>
	<p>2</p> <p>3</p> <p>4</p>		<p>2</p> <p>3</p> <p>4</p>
	<p>3</p> <p>4</p> <p>5</p>		<p>3</p> <p>4</p> <p>5</p>