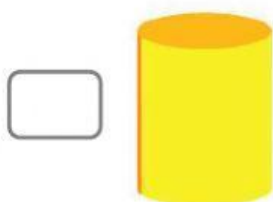



Nome: _____ Data: ____/____/____

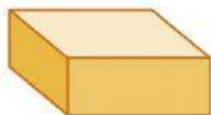
1- Assinale a figura que representa um poliedro.



2- Ligue o sólido geométrico ao nome correspondente.



Cilindro



Cone



Cubo



Paralelepípedo

Profa Rubia