

Friday 30<sup>th</sup> April, 2021

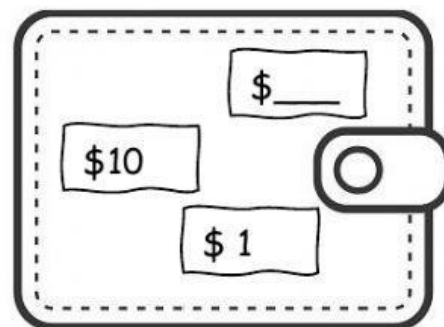
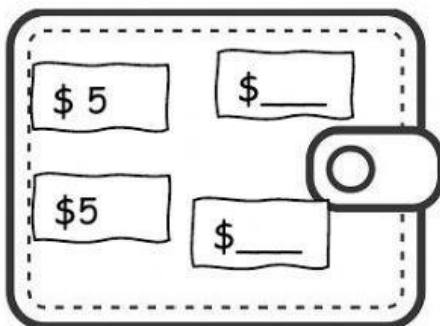
Term 3

Weekly Test 2- Mathematics

A. Complete the addition and subtraction facts for number 16.

				<div style="border: 1px solid black; width: 100px; height: 100px; margin: 0 auto; position: relative;"> <span style="position: absolute; top: 5%; left: 50%; transform: translate(-50%, -50%); font-weight: bold;">16</span> <span style="position: absolute; bottom: 10%; left: 10%; font-weight: bold;">11</span> <span style="position: absolute; bottom: 10%; right: 10%; font-weight: bold;">5</span> </div>					
	+		=						
	+		=						
	-		=						
	-		=						

B. Fill in the missing money to make \$16 in each wallet.



C. Solve the word problems. Write your number statements.

NB: Do not put in the dollar signs on the online worksheet.

1.. Nicholai had \$16.

He bought ice-cream for \$9.

How much money was left?



\_\_\_\_\_

2. Kayla bought a pack of nuts for \$5.



Mayah bought a pack of chips for \$9.



Cataleya bought a pack of sweets for \$2.



a. How much money they spent in all?

\_\_\_\_\_

b. Who spent the most money?

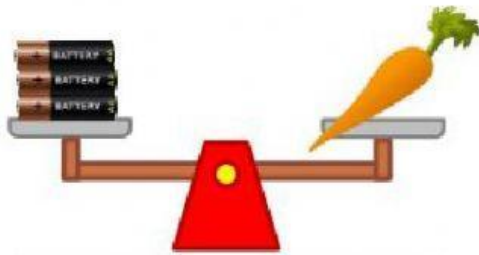
\_\_\_\_\_

c. How much more money did Mayah spend than Cataleya?

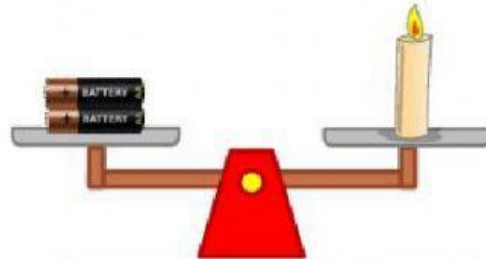
\_\_\_\_\_

Mayah spent \$\_\_\_\_\_ more than Cataleya.

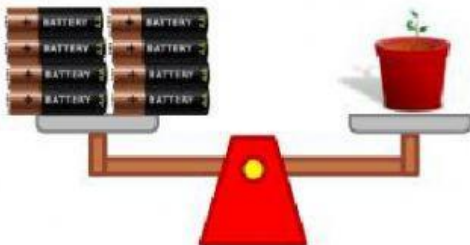
D. Look at each scale and complete each sentence.



The weight of the carrot in batteries is \_\_\_\_\_.



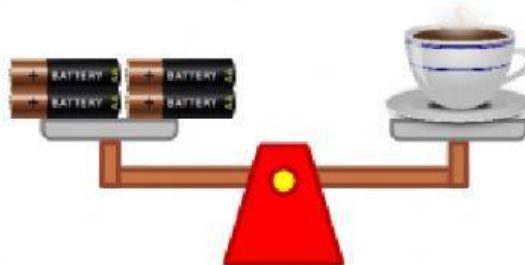
The weight of the candle in batteries is \_\_\_\_\_.



The weight of the plant in batteries is \_\_\_\_\_.



The weight of the croissant in batteries is \_\_\_\_\_.



The weight of the coffee in batteries is \_\_\_\_\_.

Which object is the **heaviest**? \_\_\_\_\_

Which object is the **lightest**? \_\_\_\_\_