

~Bismillaahirrohmaanirrohiim~

Answer the questions below.

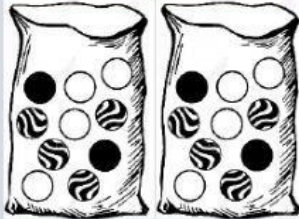
1. Write the missing numbers.



3 groups of 10 = \times =

2. Write the multiplication sentences.

a.



\times =

b.



\times =

3. Multiply.

a. $1 \times 10 = \underline{\hspace{2cm}}$


c. $7 \times 10 = \underline{\hspace{2cm}}$

b. $5 \times 10 = \underline{\hspace{2cm}}$

d. $10 \times 10 = \underline{\hspace{2cm}}$

4. A chick has 2 legs.

How many legs do 8 chicks have?

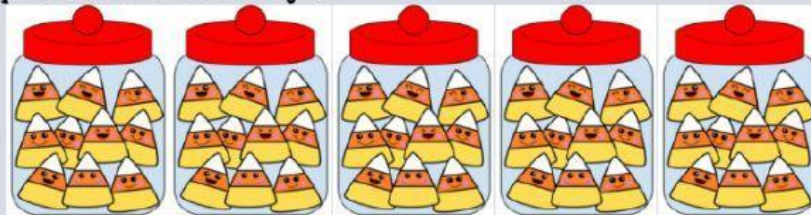


\times =

8 chicks have legs.

5. There are 10 candies in a jar.

How many candies are there in 5 jars?



\times =

There are candies in 5 jars.

6. Tika bought 8 rolls of ropes
Each roll of rope was 5 m long.
How many metres of ropes did she buy altogether?

 -

She bought _____ m of ropes altogether.

~Alhamdulillahirobbil 'aalamiin~