

ESCOLA CLASSE 08 DE BRAZLÂNDIA

PROFESSORA: _____


ALUNO: _____

DATA: ____/____/____

ATIVIDADE

1) RESOLVA AS QUESTÕES:


A) NINA TEM 5 BALINHAS E BEATRIZ TEM 4 BALINHAS. QUANTAS BALINHAS TÊM AS DUAS JUNTAS?



$$\underline{\quad\quad} + \underline{\quad\quad} = \underline{\quad\quad}$$

AS DUAS JUNTAS TÊM _____ BALINHAS.


B) MATHEUS TINHA 3 FIGURINHAS E SEU PAI LHE DEU MAIS 10 FIGURINHAS. COM QUANTAS FIGURINHAS MATHEUS FICOU ?



$$\underline{\quad\quad} + \underline{\quad\quad} = \underline{\quad\quad}$$

MATHEUS FICOU COM _____ FIGURINHAS.








C) NA CESTA DE FRUTAS TEM 4 MAÇÃS. BRUNA VAI COLOCAR 2 MAÇÃS NA CESTA. QUANTAS MAÇÃS TEREMOS NA CESTA?



_____ + _____ = _____

TEREMOS NA CESTA _____ MAÇÃ

2) COMPLETE OS QUADROS COM DEZENA E UNIDADE, ESCRREVENDO O NÚMERO QUE OS REPRESENTAM.

	<table border="1"> <thead> <tr> <th>D</th> <th>U</th> </tr> </thead> <tbody> <tr> <td></td> <td></td> </tr> </tbody> </table>	D	U		
D	U				
	<table border="1"> <thead> <tr> <th>D</th> <th>U</th> </tr> </thead> <tbody> <tr> <td></td> <td></td> </tr> </tbody> </table>	D	U		
D	U				
	<table border="1"> <thead> <tr> <th>D</th> <th>U</th> </tr> </thead> <tbody> <tr> <td></td> <td></td> </tr> </tbody> </table>	D	U		
D	U				
	<table border="1"> <thead> <tr> <th>D</th> <th>U</th> </tr> </thead> <tbody> <tr> <td></td> <td></td> </tr> </tbody> </table>	D	U		
D	U				
	<table border="1"> <thead> <tr> <th>D</th> <th>U</th> </tr> </thead> <tbody> <tr> <td></td> <td></td> </tr> </tbody> </table>	D	U		
D	U				
	<table border="1"> <thead> <tr> <th>D</th> <th>U</th> </tr> </thead> <tbody> <tr> <td></td> <td></td> </tr> </tbody> </table>	D	U		
D	U				
	<table border="1"> <thead> <tr> <th>D</th> <th>U</th> </tr> </thead> <tbody> <tr> <td></td> <td></td> </tr> </tbody> </table>	D	U		
D	U				