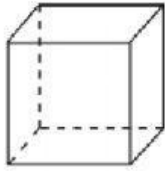


OBJ. Calcular el área de cubos

A

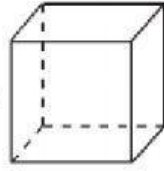


8 cm

$$A = x \cdot x$$

$$A = \text{cm}^2$$

B

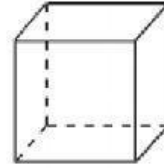


10 cm

$$A = x \cdot x$$

$$A = \text{cm}^2$$

C



9 cm

$$A = x \cdot x$$

$$A = \text{cm}^2$$