

Fill in the blanks with 'Odd' or 'Even'.

Odd and Even

2	
5	
4	
13	
9	
10	
17	
15	
7	
20	
26	


8	
12	
16	
23	
29	
10	
14	
25	
4	
11	
1	

Circle the even numbers.

23	44	15	20
41	22	1	8

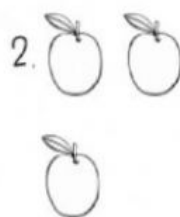
Circle the even numbers.

14	5	19	32
28	33	39	6



even

odd




even

odd



even

odd




even

odd



even

odd



even

odd




even

odd



even

odd



even

odd



even

odd