


Name: \_\_\_\_\_ Grade: \_\_\_\_\_

### Mathematics- Multiplication Arrays

Answer the questions using the arrays in each box. (Remember # of rows X # of columns)




How many rows are in the array? \_\_\_\_\_

How many columns are in the array? \_\_\_\_\_

How many dots are in the array? \_\_\_\_\_

Write a multiplication fact that is shown by the array.

\_\_\_\_\_ x \_\_\_\_\_ = \_\_\_\_\_




How many rows are in the array? \_\_\_\_\_

How many columns are in the array? \_\_\_\_\_

How many dots are in the array? \_\_\_\_\_

Write a multiplication fact that is shown by the array.

\_\_\_\_\_ x \_\_\_\_\_ = \_\_\_\_\_



How many rows are in the array? \_\_\_\_\_

How many columns are in the array? \_\_\_\_\_

How many dots are in the array? \_\_\_\_\_

Write a multiplication fact that is shown by the array.

\_\_\_\_\_ x \_\_\_\_\_ = \_\_\_\_\_