



Name: _____ Teacher: _____

Note Naming Check #1


1. What is  called? _____
2. What is  called? _____
3. What are the names of the spaces?




4. What are the names of the lines?



5. Name the notes shown (put answers on lines below the staff).



6. Show where the notes are on the staff (use a whole note).



A

D

G

F

B