

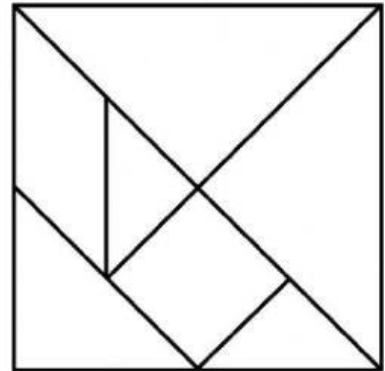
Observe o tangram abaixo e responda ao que se pede.

a) Observando o tangram, é possível lembrar-se de quais figuras planas?

b) Essas figuras têm contorno fechado ou aberto?


c) São polígonos?

d) Quantos triângulos compõem as peças no tangram?




2. Escreva o nome de cada figura e quantos lados tem.

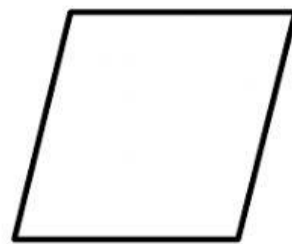
a)




d)



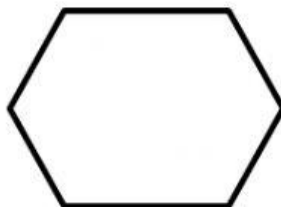
g)



b)



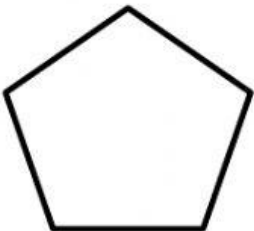
e)




h)



c)



f)



i)

