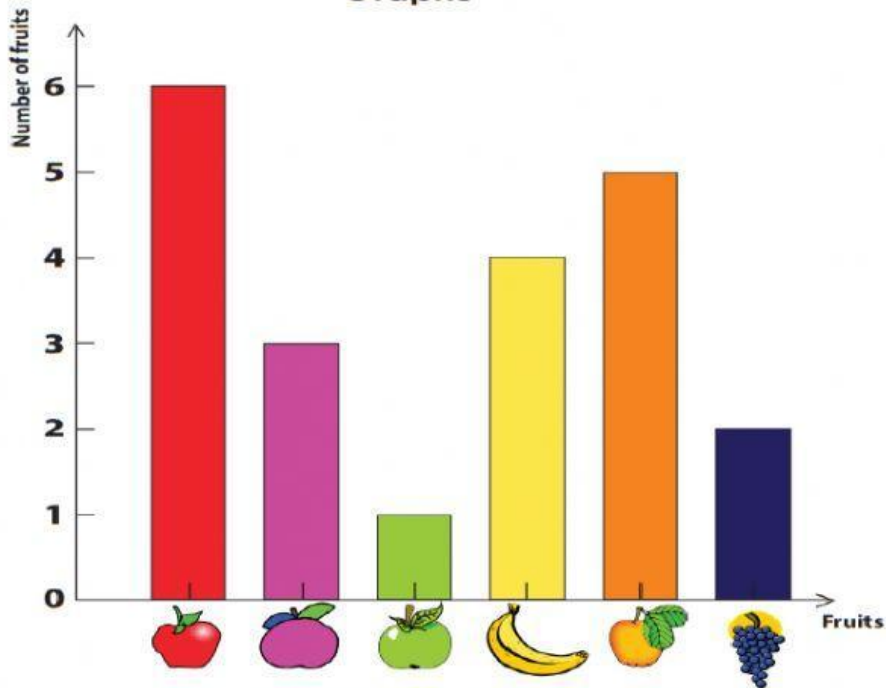








Name : \_\_\_\_\_ Class : \_\_\_\_\_

### Graphs







How many of each fruit are represented on the graph ?

		
_____	_____	_____
		
_____	_____	_____



How many paintings did the painter sell in March? . . . . paintings

Jan	
Feb	
Mar	
 = 5 Paintings	

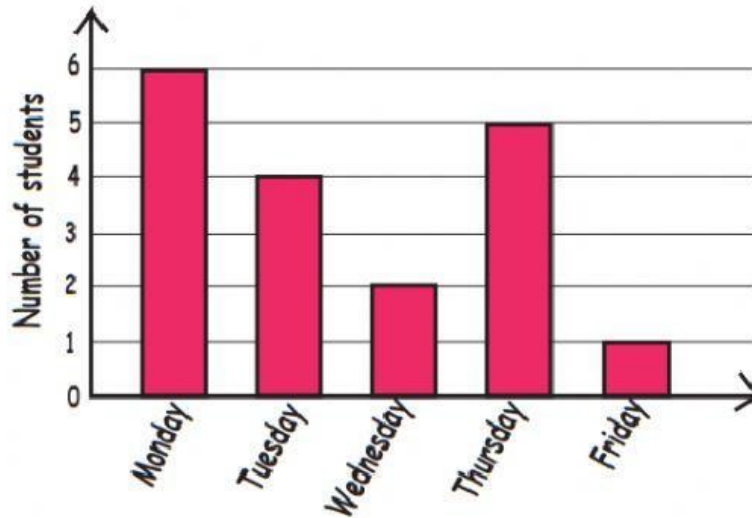
How many ice creams did the ice cream man sell in January? . . . . ice creams

Jan	
Feb	
Mar	
 = 8 Ice creams	

How many dollars did Maulana make doing his chores in February? . . . . dollars

Jan	
Feb	
Mar	
 = 7 Dollars	

The following graph represents the total number of students taking part in math classes from Monday to Friday



How many students took part in the math class on the following days ?

1) Monday .....

2) Tuesday .....

3) Wednesday .....

4) Thursday .....

5) Friday .....

6) Which day had the lowest attendance ? .....

Alhamdulillahirobbilalamin