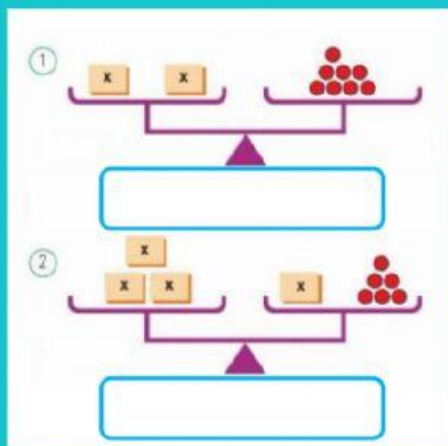


# MATEMÁTICA - EQUAÇÕES

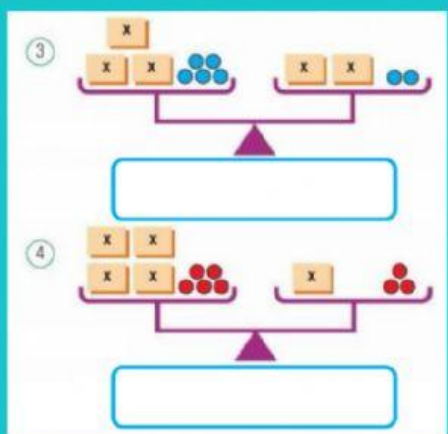
8º ANO

ALUNO ( A ) \_\_\_\_\_ DATA \_\_\_/\_\_\_/\_\_\_

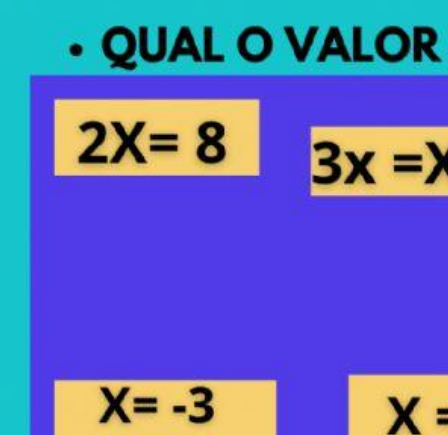
- **ARRASTE A ESQUAÇÃO PARA CADA CASO**



$$3x = x + 6$$



$$3x + 5 = 2x + 2$$



$$2x = 8$$

$$4x + 5 = x + 3$$

- **QUAL O VALOR DE CADA EQUAÇÃO ANTERIOR?**

$$2x = 8$$

$$3x = x + 6$$

$$4x + 5 = x + 3$$

$$3x + 5 = 2x + 2$$

$$x = -3$$

$$x = -2/3$$

$$x = 4$$

$$x = 3$$