







Name: _____

Class: _____

Date: _____





A. Count the blocks and write the number.

1.  +  = 

2.  +  +  = 

3.  +  = 

4.  +  = 

5.  +  +  = 



B. Count by 2s and write the missing numbers.

302	_____	_____	308	_____
-----	-------	-------	-----	-------

_____	314	_____	_____	320
-------	-----	-------	-------	-----

C. Count by 3s and write the missing numbers.

_____	512	_____	518	_____
-------	-----	-------	-----	-------

524	_____	530	_____	_____
-----	-------	-----	-------	-------

