

Ability Test Practice 4

Teacher: Emile Rodney of Boundbrook Primary School

Search on Youtube



Read each question carefully and select the best possible response. Write the correct letter in the space provided.

1. Teach is to taught as hide is to _____.
a. seek b. hid c. hidden d. hided
2. Cat is to kittens as lion is to _____.
a. lioness b. tiger c. jungle d. cub

For Items 3 and 4, select the word that does not belong to the group.

3.
a. Cuba b. Barbados c. Guyana d. Jamaica
4.
a. toaster b. chair c. blender d. microwave

For Items 5 and 6, select the word that is a necessary component of the word in **Bold**.

5. **Camera**
a. lens b. flash c. memory card d. tripod stand
6. **School**
a. chalkboard b. desk c. chairs d. students

Select the most appropriate word to replace the underline phrase in each sentence for items 7 and 8.

7. The books was sold at the place where good and properties are sold to the highest bidder.
a. Library b. bookstore c. auction d. school
8. Gabriel went to visit the place where historic relics are kept.
a. museum b. library c. gallery d. park

9. Tom's mother's sister has a daughter. What is the daughter's relationship to tom?

- a. cousin b. niece c. aunt d. sister

10. Mark was 18 five years ago. How old will he be in a decade?

- a. 23 b. 25 c. 30 d.33

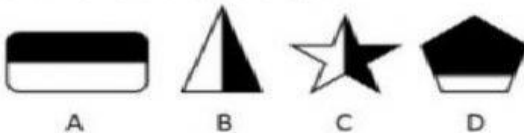
11. Find the missing number in the following series? **85, 81, 83, 79, 81, 77, _____**

- a. 80 b. 79 c. 78 d.77

12. Chose the best word to complete the sentence. "**Mother went to the store to _____ a box of milk.**"

- a. bye b. buy c. bi d. by

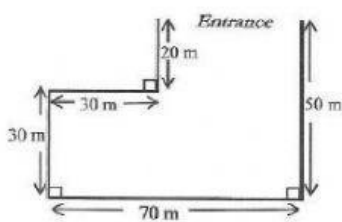
13. Which is the odd one out?



14. Which word is **not** like the others?

- a. empty b. vacant c. occupied d. uninhabited

15. The diagram below show a playground measurement of the borders. What is the length of the entrance?



- a. 200cm b. 100cm c.70cm d. 40cm

16. In a Competition the top 5 persons are awarded a cash prize. 1st place receives \$2,000, 2nd place receives \$1,000 and 3rd place receive \$500. If the trend continues, how much money would 5th place receive?

- a. \$125 b. \$150 c.\$250 d.\$400

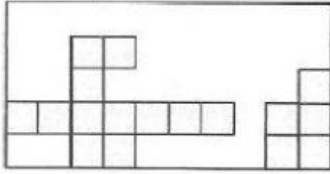
17. How many halves are there in 50?

- a. 100 b. 25 c. 20 d. 5

18. In a cricket match the West Indies scored 114 more runs than Bangladesh. How runs did Bangladesh score if the West Indies Scored 286 runs?

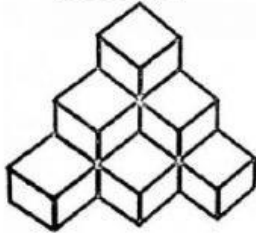
- a. 127 b. 172 c. 182 d. 400

19. Square tiles of the same size are used to cover a rectangular floor. How many **more** tiles are needed to complete the floor ?



- a. 17 b. 33 c. 39 d. 50

20. The cubes below represents boxes packed in a warehouse corner. How many box are there in the warehouse?



- a. 6 b. 8 c. 9 d. 10