



Spring Hill International School

Quiz no.7

Scholastic Year 2020/ 2021

Student's Name:

Class & Section: Grade 6

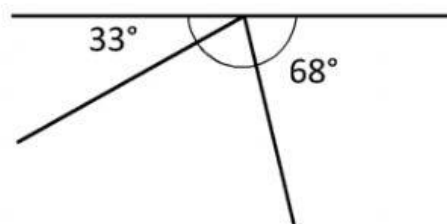
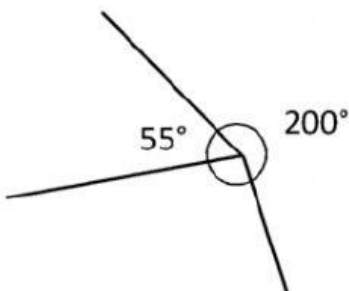
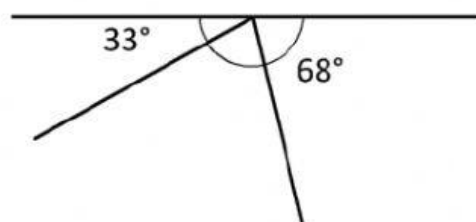
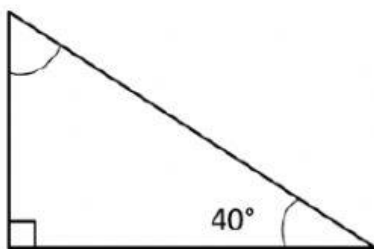

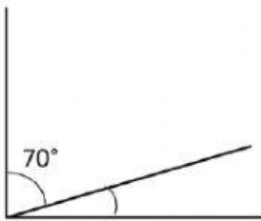
Teacher's Name: Raghda Ziad

Subject: Math / Checkpoint

Test Duration: 10 mins

Date: 27/ April / 2021

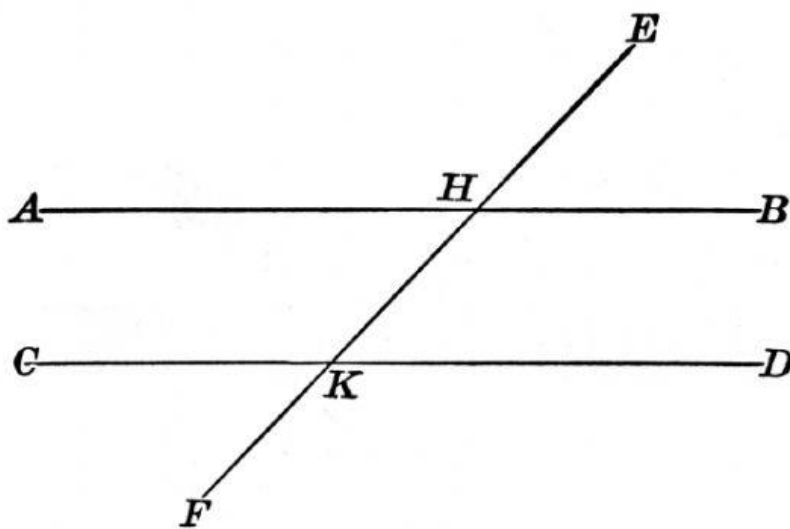
Question no.1: Find the missing angle



Question no.2: Complete the following statements using words from the box

Transversal	Parallel	Perpendicular	Vertically opposite
360°	Quadrilateral	Triangle	Right angle

- a) The angles in a _____ add up to 180°
- b) The angle around a point add up to _____
- c) _____ lines create a _____ that equals 90°
- d) _____ angle are equal
- e) The angles in a _____ add up to 360°



- f) AB and CD are _____ lines
- g) FE is a _____ line