





PICTOGRAPH

A local burger shop made a pictograph of the number of Bopper Burgers each worker sold during 4 days. Use the information to answer the questions.

Tia	
Mark	
Sam	
Kim	

Each  stands for 5 Bopper Burgers

1. Who sold the most burgers?
2. Twenty-five burgers were sold by
3. Which workers sold the same number of burgers?
4. How many burgers in all were sold by Mark and Tia?
5. How many more burgers did Mark sell than Sam?
6. How many burgers were sold altogether?