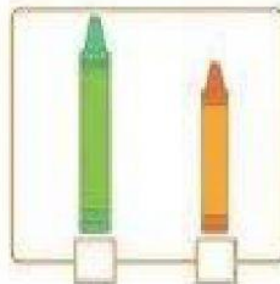
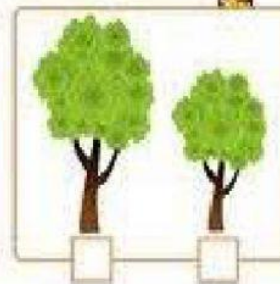


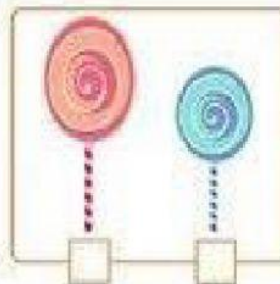
D.A.V. PUBLIC SCHOOL, PRATAP VIHAR  
CLASS-FIRST  
MATHS, TOPIC COMPARISON

Tall or Short

Which one is taller?



Which one is shorter?



## Increasing Order

Number the things in each set in an increasing order according to their size.



## Increasing Order

Number the things in each set in an increasing order according to their size.

