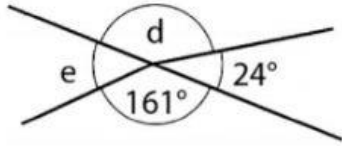
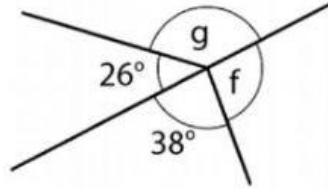


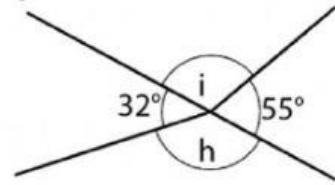
Одредување големина на непознат агол



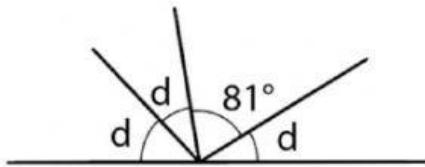
$d = \underline{\hspace{2cm}}$ $e = \underline{\hspace{2cm}}$



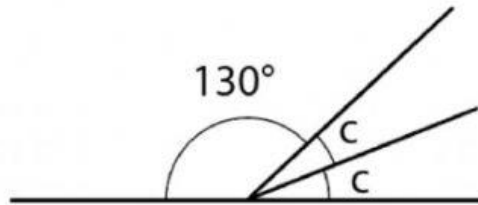
$f = \underline{\hspace{2cm}}$ $g = \underline{\hspace{2cm}}$



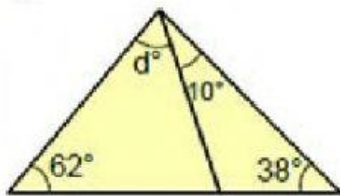
$h = \underline{\hspace{2cm}}$ $i = \underline{\hspace{2cm}}$



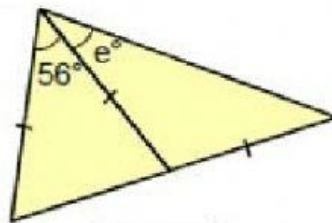
$d = \underline{\hspace{2cm}}$



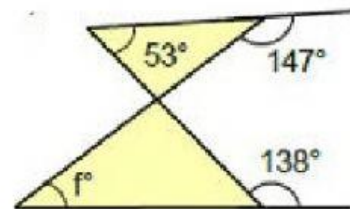
$c = \underline{\hspace{2cm}}$



$d = \underline{\hspace{2cm}}$



$d = \underline{\hspace{2cm}}$



$f = \underline{\hspace{2cm}}$