









PONTE DO SABER



1º ano do Ensino Fundamental



1. REGISTRE EM SEU CADERNO A QUANTIDADE DE CADA DADO, DEPOIS RESOLVA AS ADIÇÕES:



A)  
 $\square + \square = \square$



B)  
 $\square + \square = \square$



C)  
 $\square + \square = \square$

D)  
 $\square + \square = \square$

E)  
 $\square + \square = \square$

F)  
 $\square + \square = \square$

G)  
 $\square + \square = \square$

H)  
 $\square + \square = \square$

2. DESCUBRA E REGISTRE EM SEU CADERNO O NÚMERO QUE ESTÁ COBERTO PELAS FIGURAS:

