



AMITY INTERNATIONAL SCHOOL, SECTOR-6, VASUNDHARA

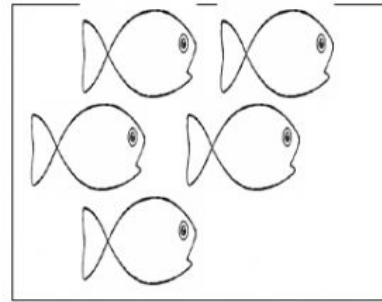
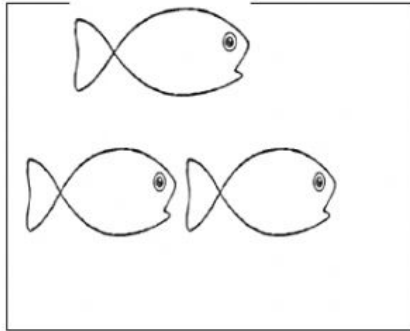
Session : 2021-22

Subject: Mathematics

Name - _____ Class KG- _____ Date- _____

Who has least?

Select the tank with least number of fishes.



Select the smallest number:

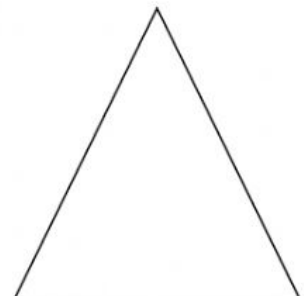
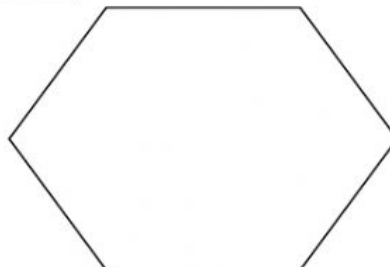
3

5

2

4

Select the shape with least sides.



Select the dice with the smallest number.

