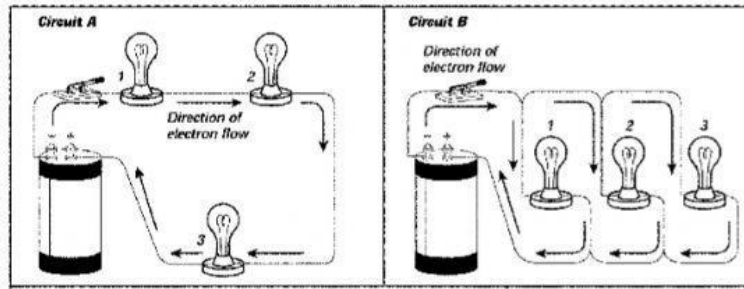


## Unit 17 Electricity and Magnetism Study Guide

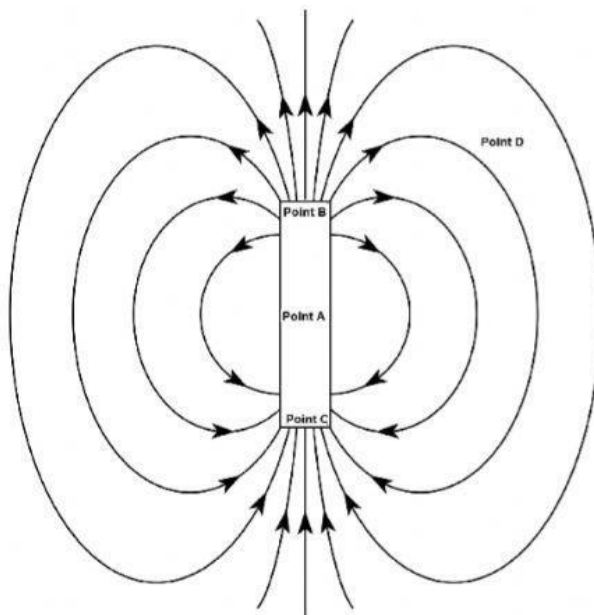
### Multiple Response

Identify one or more choices that best complete the statement or answer the question.

Series and Parallel Circuits

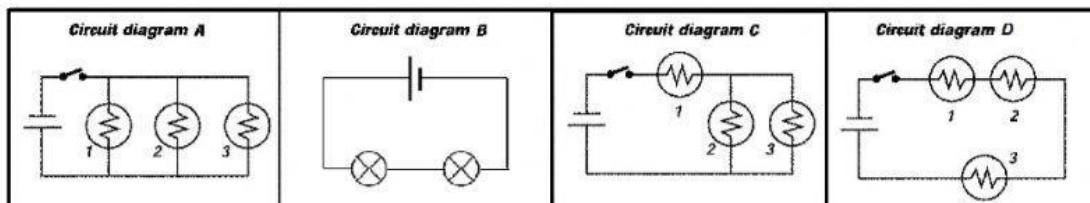


1. Pick all the statements that are true.
  - a. Circuit A is a series circuit
  - b. Circuit A is a parallel circuit
  - c. Circuit B is a series circuit
  - d. Circuit B is a parallel circuit



2. At which point or points would the magnetic force be the weakest? Pick all that apply.
  - a. Point A
  - b. Point B
  - c. Point C
  - d. Point D

Series and Parallel Circuits



3. Which circuit or circuits are series? Select all that apply.
  - a. Circuit A
  - b. Circuit B
  - c. Circuit C
  - d. Circuit D
4. Which circuit or circuits are parallel? Pick all that apply.
  - a. Circuit A
  - b. Circuit B
  - c. Circuit C
  - d. Circuit D
5. Which circuit or circuits have a switch? Pick all that apply.
  - a. Circuit A
  - b. Circuit B
  - c. Circuit C
  - d. Circuit D