

Sometimes, Mum takes Sarah and Fatima to buy snacks.
After taking the snacks, they pay them with some money.



Sarah needs to pay 16 cents altogether.

She pays with **one** 10-cent coins, **one** 5-cent coins and **one** 1-cent coin



Fatima needs to pay 30 cents altogether.

She gives **three** 10-cent coins to the cashier.

Alhamdulillah, they have some snacks to enjoy at home.

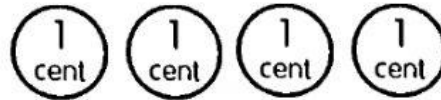


To be able to use coins like Sarah and Fatima,
Today, we are going to learn to pay with coins in cents.

Let's practise.

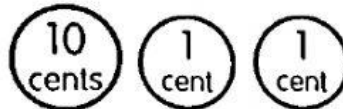
Write your answer in words. One has been done for you.

1) This hairband costs 4 cents.



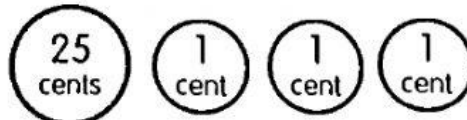
We can pay for it with four 1-cent coins.

2) This pencil costs 12 cents.



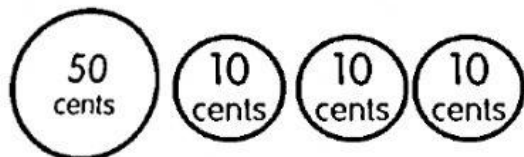
We can pay for it with 10-cent coins and 1-cent coins.

3) This bun costs 28 cents.



We can pay for it with 25-cent coins and 1-cent coins.

4) Umar has this toy car. It costs 80 cents.



We can pay for it with 50-cent coin and 10-cent coins.