

Name: \_\_\_\_\_ Roll No : \_\_\_\_\_ Class : 1 Section : \_\_\_\_\_

Date : 28 April 2021  
Lesson Code: 1M21

### Counting & Number name ( 101- 125)

Revise the concepts from lesson 21 pdf then solve the worksheet.  
Send your score to maths

Q1: Read the statement carefully and match with the correct number.

1 hundred , 2 tens and 0 ones

1 hundred , 1 ten and 0 ones

1 hundred , 0 tens and 2 ones

1 hundred , 2 tens and 3 ones

1 hundred , 0 tens and 1 one

101

123

110

102


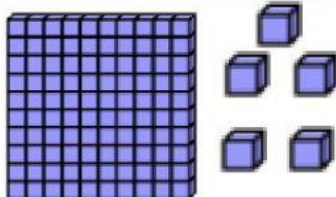
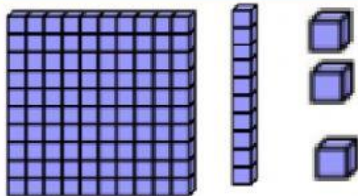
120

Q2: Choose the correct number name for the given statements.

1 hundred , 0 tens and 8 ones

1 hundred , 2 tens and 1 one

Q3: Count and write tens, ones and hundreds. Also form the number. One is done for you.

Blocks	Hundreds, tens and ones	Number
	<u>1</u> Hundred, <u>1</u> ten and <u>0</u> ones	110
	____ Hundred, ____ tens and ____ ones	
	____ Hundred, ____ ten and ____ ones	