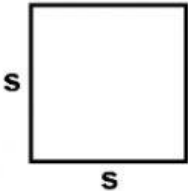
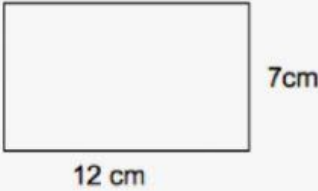
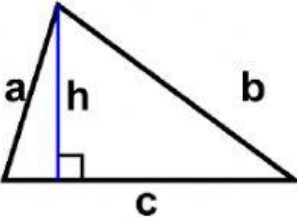
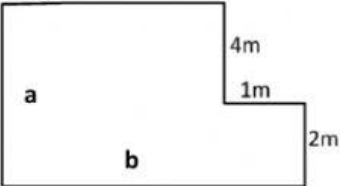
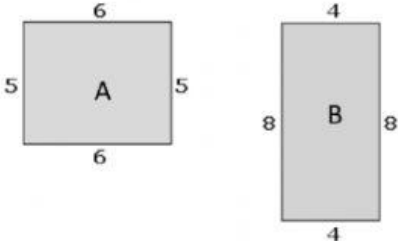


Area and Perimeter (Graded Worksheet)

Find the **area and perimeter** of each geometric shape. Make sure to **show your work** by writing a **number sentence** for each. Do not forget your **units!** (2 pts each)

 <p style="margin-left: 200px;">$s = 5.7 \text{ m}$</p>	<p>Perimeter:</p> <p>Area:</p>
	<p>Perimeter:</p> <p>Area:</p>
 <p style="margin-left: 200px;">$a = 3.5 \text{ ft}$ $b = 4.7 \text{ ft}$ $c = 4.2 \text{ ft}$ $h = 3 \text{ ft}$</p>	<p>Perimeter:</p> <p>Area:</p>
	<p>Length of side a:</p> <p>Length of side b:</p> <p>Perimeter of whole shape:</p>
	<p>Which shape has a larger perimeter and area (Figure A or B)? Explain your answer with evidence.</p> <div style="border: 1px solid black; height: 100px; width: 100%;"></div>