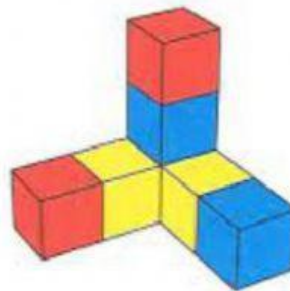
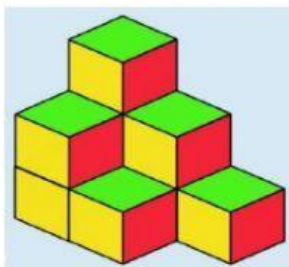

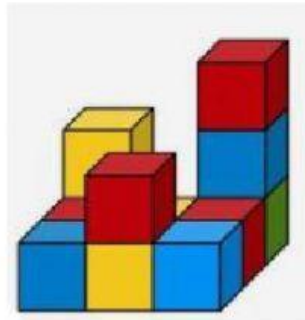
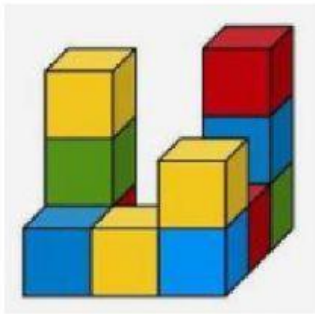
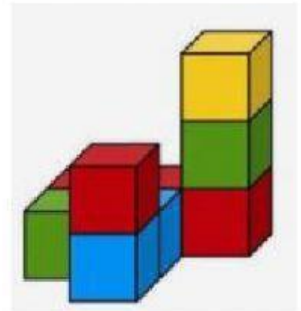
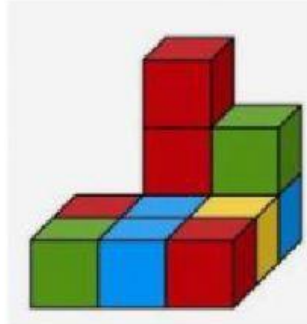
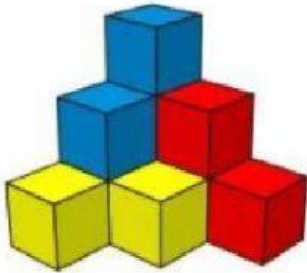




1. SELECCIONA EL NÚMERO DE CUBOS QUE TIENE CADA FIGURA.

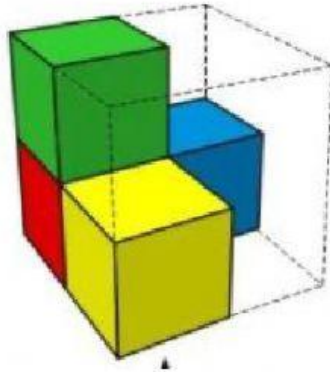




Centro Educativo "LICEO BEULA"

NIT: 900715508-3 Resolución de Aprobación No. 1209 de 2014 DANE 370221066318
Cra. 25 N°. 8B-11 B/Guayabal (sector carrizo de piedra)
Tel: 2960278 - Coveñas Sucre / E-mail: liceobeula@hotmail.com

2. RESPONDE: ¿Cuántos CUBOS HACEN FALTA PARA LLENAR LA CAJA?



3. RESPONDE: ¿CUÁL ES EL PATRÓN DE SECUENCIA DE LOS SIGUIENTES VOLUMENES?

