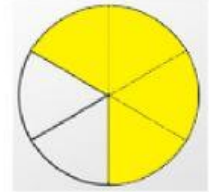
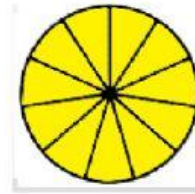


NOMBRE DEL ALUMNO:

## SUMA DE FRACCIONES

- ✓ Observa y coloca arriba de cada fracción su representación gráfica.
- ✓ A partir de lo que observas, trata de resolver cada suma de fracciones mentalmente.
- ✓ Escribe el resultado en el rectángulo.

$$\frac{11}{11} + \frac{4}{6} = \boxed{\phantom{000}}$$



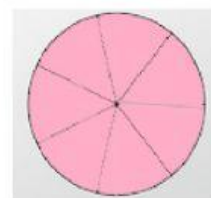
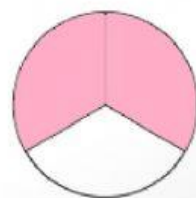
+

$$\frac{7}{7}$$

+

$$\frac{2}{3}$$

=



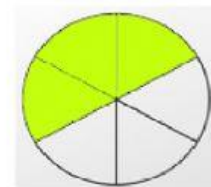
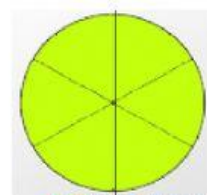
+

$$\frac{9}{6}$$

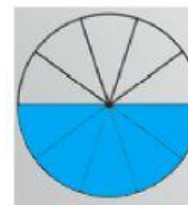
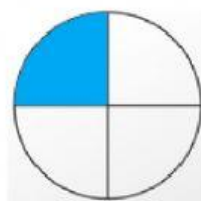
+

$$\frac{1}{3}$$

=



$$\frac{5}{10} + \frac{1}{4} = \boxed{\phantom{00}}$$



$$\frac{3}{5} + \frac{12}{4} = \boxed{\phantom{00}}$$

