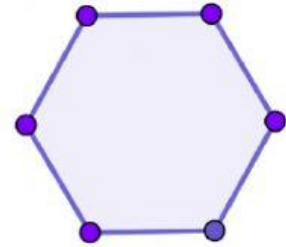
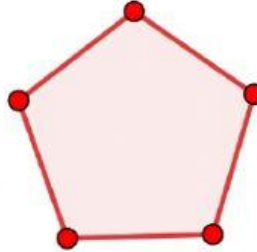
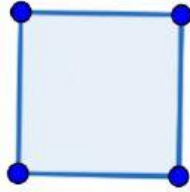
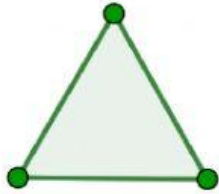


CONHECENDO UM POUCO MAIS OS POLÍGONOS REGULARES

PROFESSORA KAROL ROZENDO

1) VAMOS LIGAR OS POLÍGONOS AO SEU NÚMERO DE LADOS?



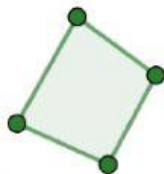
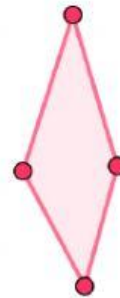
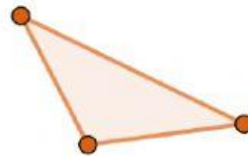
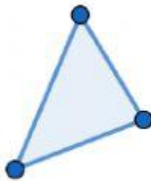
5 LADOS

6 LADOS

3 LADOS

4 LADOS

2) ARRASTE E SEPRE OS POLÍGONOS IGUAIS.



--	--

