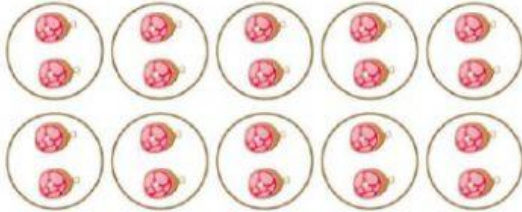


COUNTING IN GROUPS

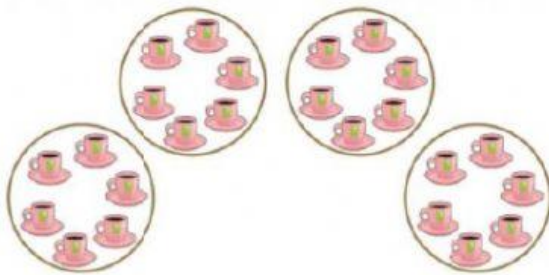
Q. Write the total number without counting each thing.

1)




$$\begin{array}{r} _ + _ + _ + _ + _ + _ \\ + _ + _ + _ + _ = _ \end{array}$$

2)




$$_ + _ + _ + _ = _$$

3)




$$_ + _ + _ = _$$

4)



$$\begin{array}{r} _ + _ + _ + _ + _ + _ \\ + _ = _ \end{array}$$

5)



$$_ + _ = _$$