

Name: \_\_\_\_\_ Date: \_\_\_\_\_




# Area


(length x width)




Find the area by counting the squares.



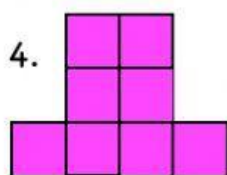
Area: \_\_\_\_\_



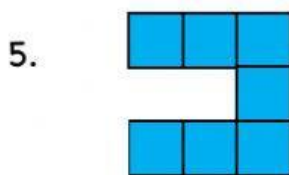
Area: \_\_\_\_\_



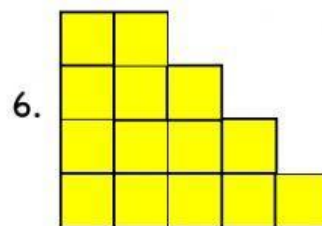
Area: \_\_\_\_\_



Area: \_\_\_\_\_

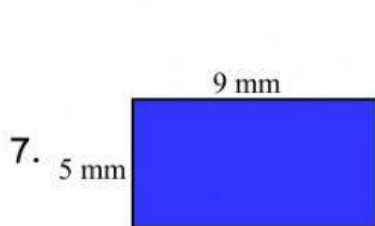


Area: \_\_\_\_\_

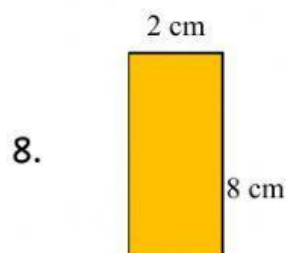


Area: \_\_\_\_\_

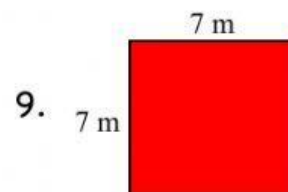
Find the area by multiplying the length x width.



Area: \_\_\_\_\_ mm<sup>2</sup>



Area: \_\_\_\_\_ cm<sup>2</sup>



Area: \_\_\_\_\_ m<sup>2</sup>