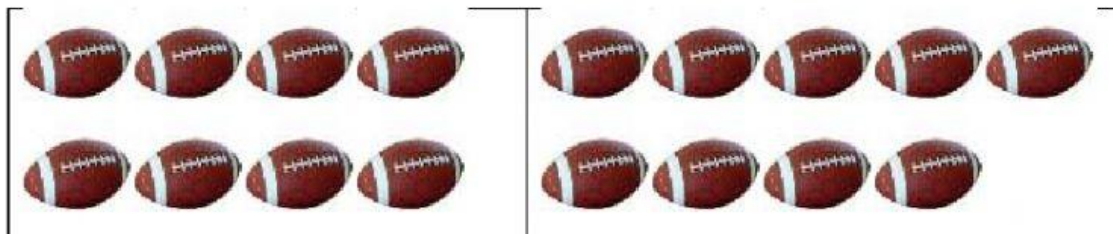


E1 Addition Progress Check



1. Find the total number of rugby balls. Complete the sum below.



+

=

2

2. Complete the sums:

$5 + 11 = \dots\dots\dots$

$7 + 13 = \dots\dots\dots$

2

3. A cafe sold ten cups of tea in the morning and 4 in the afternoon.

How many cups of tea were sold **altogether**.

Write a sum in the box below to show your working out

Answer =

2

E1 Subtraction Progress Check



1. Write each of these using numbers and the symbols - and =. Then calculate the answer. The first one has been done for you:

10 subtract 2 equals

$$10 - 2 = 8$$

13 subtract 6 equals



.....

20 subtract 9 equals

.....

2

2. There are 7 people at a bus stop. Three get on the bus.
How many people are **left** at the bus stop? Show your working out



.....

.....

.....

1

Answer:people.

3. Errol is fifteen years old. His sister Juanita is four years **younger**.
How old is Juanita? Show your working.

.....

.....

Answer: years old.

2