



Spring Hill International School

Quiz no.6

Scholastic Year 2020/ 2021

Student's Name:

Class & Section: Grade 4

Teacher's Name: Raghda Ziad

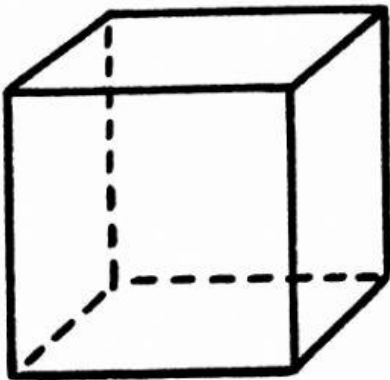
Subject: Math / Checkpoint

Test Duration: 10 mins

Date: 20/ April / 2021

Question no.1: Complete the answer boxes

Cube




Number of faces

Number of vertices

Number of edges

Cylinder

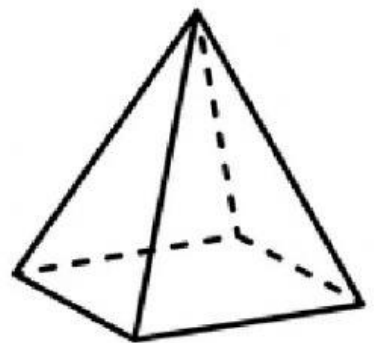


Number of faces

Number of vertices

Number of edges

Square-based pyramid



Number of faces

Number of vertices

Number of edges

Question no.2: Select the correct name for each shape

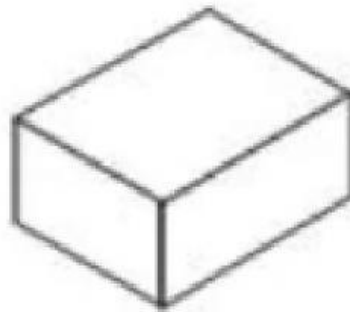


a) Pyramid

b) Cone

c) triangle

d) cylinder

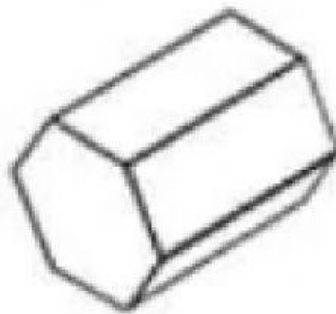


a) Cuboid

b) Cube

c) Cone

d) Triangle
prism



a) Hexagonal based
pyramid

b) Hexagon

c) Hexagonal
prism

d) Hexahedron