

Homework





Name:

Date: Friday, April 16, 2021

Subject: Mathematics

Temperature and Thermometers

Write **hot** or **cold** under each picture.

			
<hr/> <hr/> <hr/>	<hr/> <hr/> <hr/>	<hr/> <hr/> <hr/>	<hr/> <hr/> <hr/>

Read thermometers and write the correct temperature.

