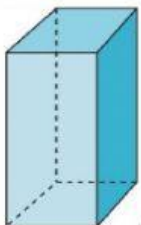


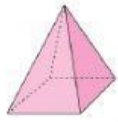


Prueba Corta: Identifica las figuras bidimensionales y tridimensionales

Parea las figuras con el nombre.



cono

cilindro

Prisma rectangular

piramide

cubo

triangulo

rombo

circulo

cuadrado

rectangulo