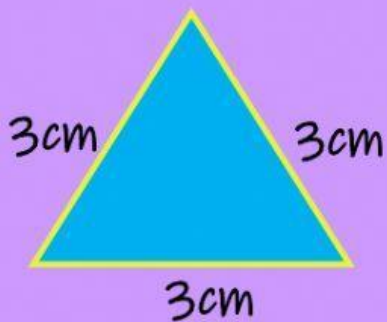


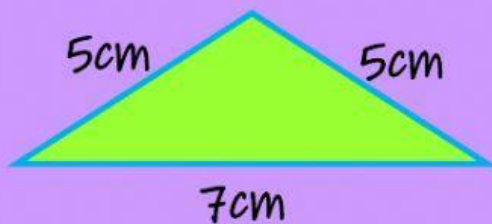
Perímetro del Triángulo



$$P = | + | + |$$

$$P = \square + \square + \square$$

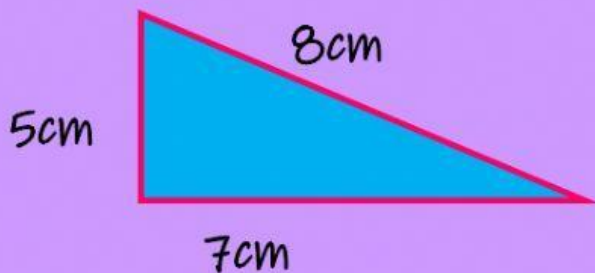
$$P = \square \square$$



$$P = | + | + |$$

$$P = \square + \square + \square$$

$$P = \square \square$$



$$P = | + | + |$$

$$P = \square + \square + \square$$

$$P = \square \square$$

¡BUEN
TRABAJO!

