




Social Studies Quiz
First Bimester - Second Grade

Name: _____ Date ____ / ____ / 2021

Score: ____/22

I. Look at the compass rose and choose the correct option. (5 points)



1. The compass rose shows _____ directions:
a. 4 b. 8 c. 3

2. Which letter represent the **West**?
a. N b. W c. S

3. Which letter represent the **North**?
a. E b. S c. N

4. The letter **S** represents the _____:

- a. East b. North c. South

5. The letter **N** represents the _____:

- a. South b. West c. North

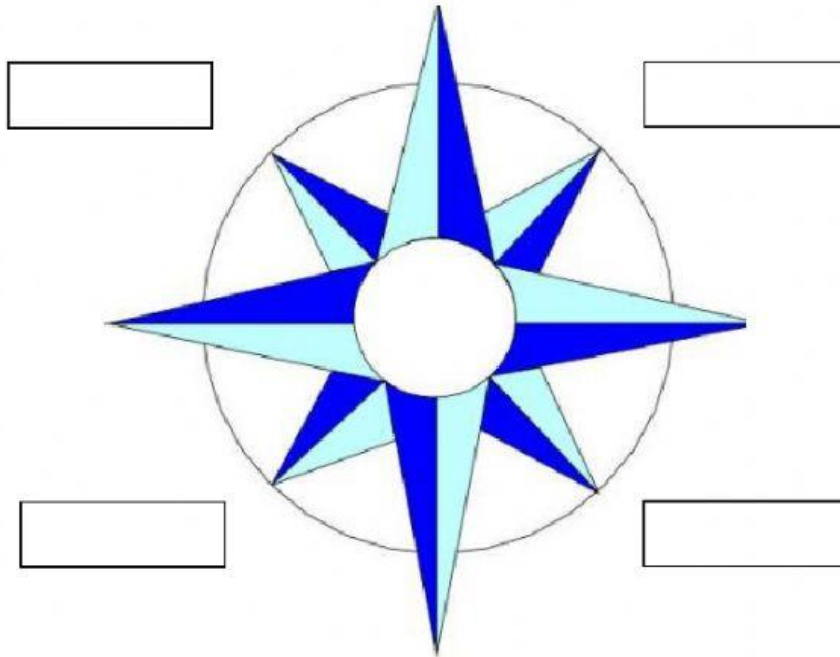
II. Look at the compass rose and drag the intermediate cardinal points. (4 points)

North East

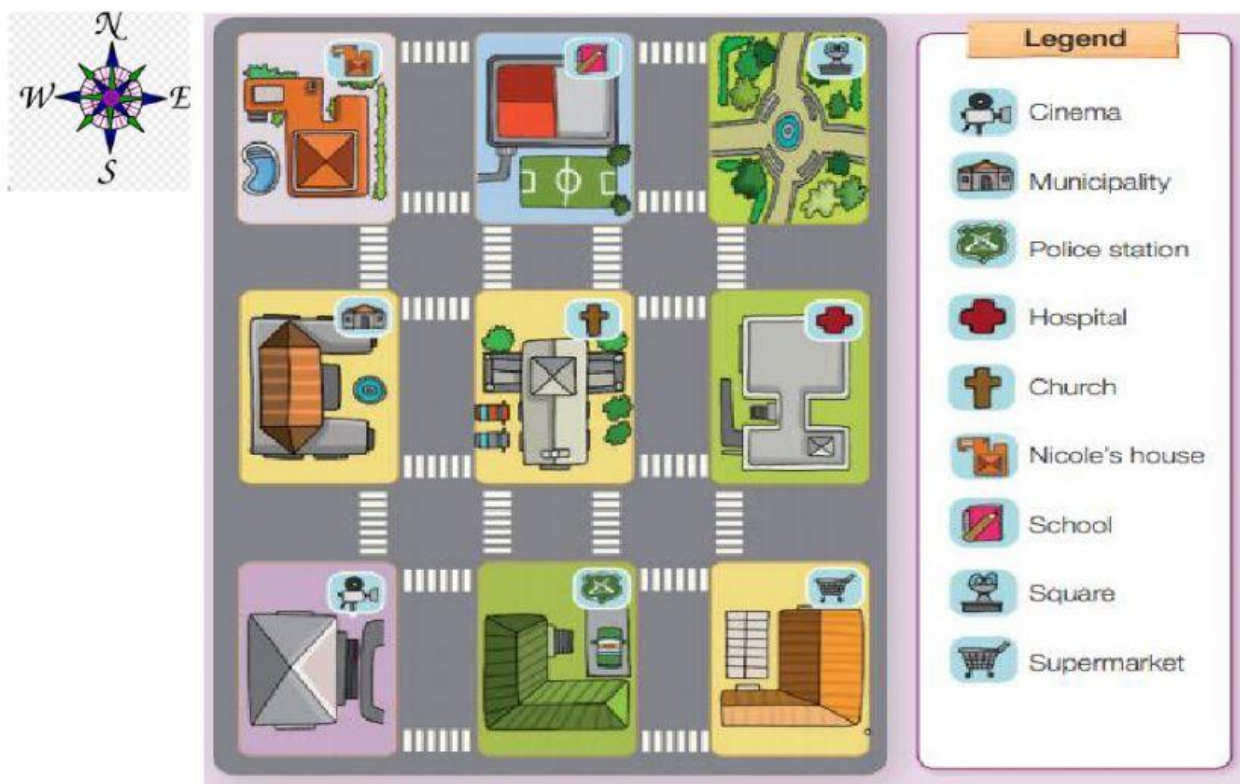
South East

North West

South West



III. Look at the plan and write the position of the buildings according to the cardinal points. (8 points)



1. The municipality is to the _____ of the cinema.
 a. North b. South c. West
2. The hospital is to the _____ of the church.
 a. East b. South c. West
3. The cinema is to the _____ of the police station.
 a. North b. South c. West
4. The supermarket is to the _____ of the hospital.
 a. East b. South c. West

IV. Look at the map and match with the name of the Continent.
(5 points)



Asia



Africa



Europe



America



AUSTRALIA /Oceania