

PRÉ II

ESCOLA MUNICIPAL GENÉSIO VIANA

PROFESSORA: Cristiane Vieira da Costa

DATA: 14/04/2021

ALUNO (A):

LIGUE OS NUMERAIS ÀS QUANTIDADES CORRESPONDENTES.

1

2

3

4

5




6

7

8

9

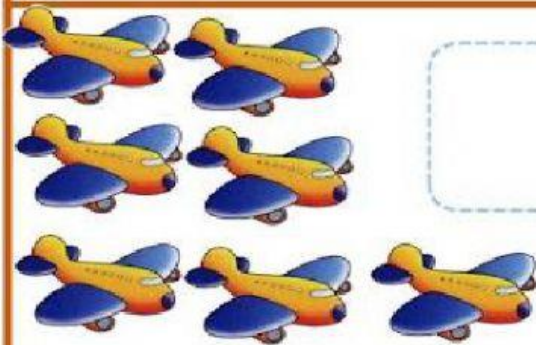
10



QUANTOS SÃO?










dani educar

QUANTOS SÃO?









dani educar