



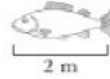
The Fish Tale - TLO CHECK BY HM SIR

Name - Class - Date of Submission -


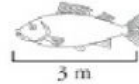
- 1 Given below are the dimensions of a whale shark and a fish. Count the number of fishes required to complete the length of whale shark and fill in the blanks. One has been done for you.



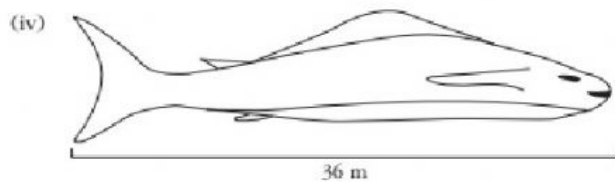
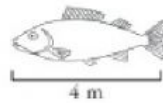
=



=



=



=

