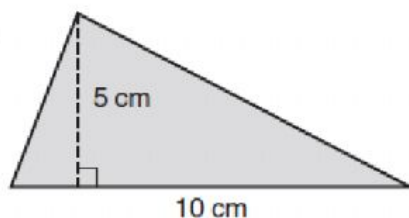




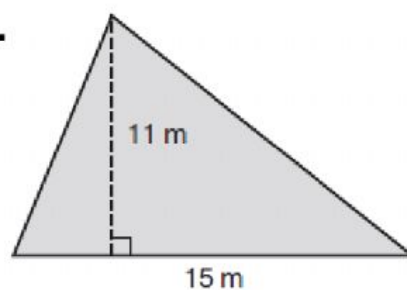
Find the area of each triangle.

1.



cm^2

2.



m^2



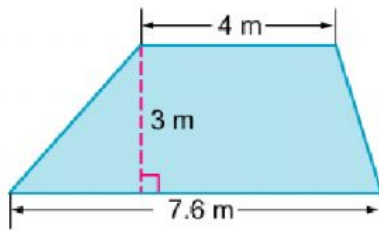
Common Core Quick Check

Use with Lesson 3
Standard 6.G.1

3. A triangular sail is 40 feet tall and 25 feet long. What is the area of the sail?

ft²

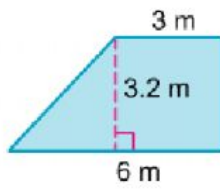
Find the area of the trapezoid.



m^2

MATH

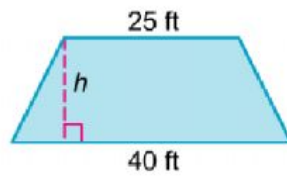
Find the area of the trapezoid.



m^2

MATH

The trapezoid has an area of 487.5 square feet. Find the height.



ft