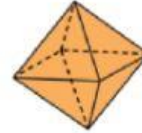
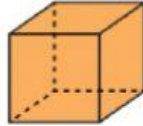
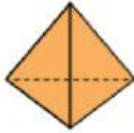


CUERPOS GEOMÉTRICOS

Escribe el nombre de cada poliedro:

Escribe el nombre de cada poliedro y contesta.

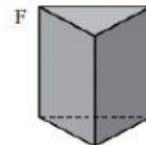
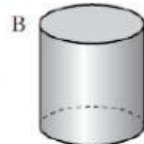
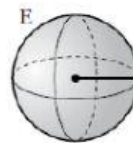
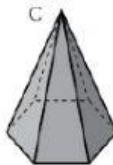
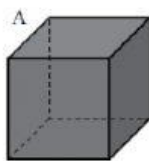


Completa la tabla.

	Tetraedro	Cubo	Octaedro	Dodecaedro	Icosaedro
Número de caras					
Polígono de las caras					
Número de vértices					



Escribe los nombres de estos cuerpos geométricos:



A →

D →

B →

E →

C →

F →